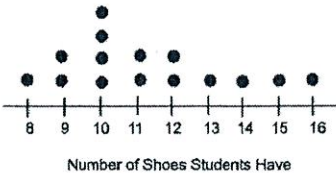
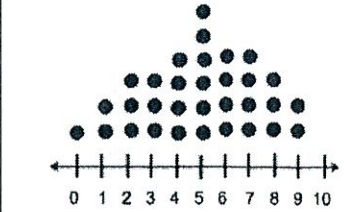


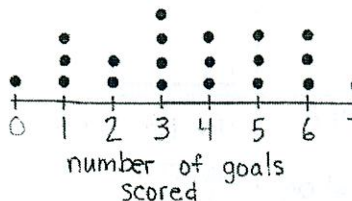
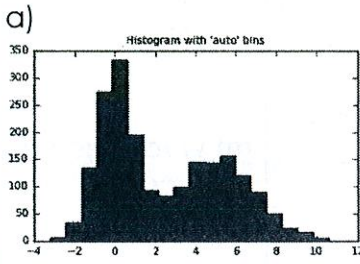
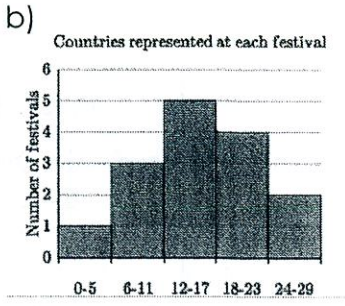
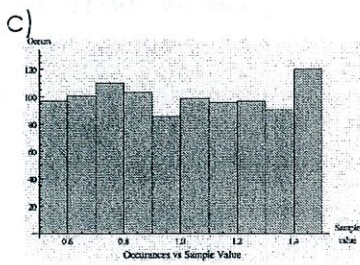
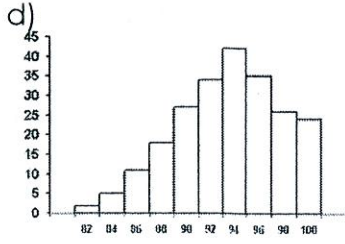


Topic	Things to Remember	Practice																					
<p>1) Two Way Frequency Tables (<i>day 1 notes</i>)</p>	<ul style="list-style-type: none"> <li>Joint frequencies: inside cells</li> <li>Marginal frequencies: outside cells (totals)</li> </ul>	<p>a) Fill in the blanks below.</p> <table border="1" data-bbox="719 296 1417 583"> <thead> <tr> <th></th> <th>High School Diploma</th> <th>Bachelor's Degree</th> <th>Master's/ Doctoral Degree</th> <th>Total</th> </tr> </thead> <tbody> <tr> <th>Male</th> <td>16</td> <td>46</td> <td></td> <td>65</td> </tr> <tr> <th>Female</th> <td></td> <td>51</td> <td>3</td> <td></td> </tr> <tr> <th>Total</th> <td>28</td> <td></td> <td>6</td> <td></td> </tr> </tbody> </table>			High School Diploma	Bachelor's Degree	Master's/ Doctoral Degree	Total	Male	16	46		65	Female		51	3		Total	28		6	
	High School Diploma	Bachelor's Degree	Master's/ Doctoral Degree	Total																			
Male	16	46		65																			
Female		51	3																				
Total	28		6																				
	<ul style="list-style-type: none"> <li>To create relative frequencies, divide each frequency by the grand total – round to the nearest hundredth</li> </ul>	<p>b) Create a two way <b>relative frequency</b> table based on the two way frequency table above.</p>																					
	<ul style="list-style-type: none"> <li>How many = whole number</li> <li>Probability = decimal rounded to nearest hundredth</li> <li>Percent = percent (be sure to include % with answer)</li> </ul>	<p>Use either table above to answer the following questions.</p> <table border="1" data-bbox="695 995 1417 1360"> <tbody> <tr> <td data-bbox="695 995 1068 1184"> <p>c) How many people have a high school diploma?</p> </td> <td data-bbox="1068 995 1417 1184"> <p>d) What percentage of people surveyed were female?</p> </td> </tr> <tr> <td data-bbox="695 1184 1068 1360"> <p>e) What is the probability that a person has a Bachelor's Degree?</p> </td> <td data-bbox="1068 1184 1417 1360"> <p>f) What is the total number of people surveyed?</p> </td> </tr> </tbody> </table>		<p>c) How many people have a high school diploma?</p>	<p>d) What percentage of people surveyed were female?</p>	<p>e) What is the probability that a person has a Bachelor's Degree?</p>	<p>f) What is the total number of people surveyed?</p>																
<p>c) How many people have a high school diploma?</p>	<p>d) What percentage of people surveyed were female?</p>																						
<p>e) What is the probability that a person has a Bachelor's Degree?</p>	<p>f) What is the total number of people surveyed?</p>																						
	<ul style="list-style-type: none"> <li>Conditional probability key words: "if", "given that", "what percent of _____", etc.</li> <li>You will need to divide a joint frequency by a marginal frequency</li> <li>See above for how answers should look</li> </ul>	<p>Use either table above to answer the following questions.</p> <table border="1" data-bbox="695 1472 1417 2045"> <tbody> <tr> <td data-bbox="695 1472 1068 1724"> <p>g) If a person is male, what is the probability that they have a Master's Degree?</p> </td> <td data-bbox="1068 1472 1417 1724"> <p>h) What percent of people with high school diplomas are male?</p> </td> </tr> <tr> <td data-bbox="695 1724 1068 2045"> <p>i) What percent of people with Bachelor's Degrees are female?</p> </td> <td data-bbox="1068 1724 1417 2045"> <p>j) Given that a person is female, what is the probability that they have a high school diploma?</p> </td> </tr> </tbody> </table>		<p>g) If a person is male, what is the probability that they have a Master's Degree?</p>	<p>h) What percent of people with high school diplomas are male?</p>	<p>i) What percent of people with Bachelor's Degrees are female?</p>	<p>j) Given that a person is female, what is the probability that they have a high school diploma?</p>																
<p>g) If a person is male, what is the probability that they have a Master's Degree?</p>	<p>h) What percent of people with high school diplomas are male?</p>																						
<p>i) What percent of people with Bachelor's Degrees are female?</p>	<p>j) Given that a person is female, what is the probability that they have a high school diploma?</p>																						

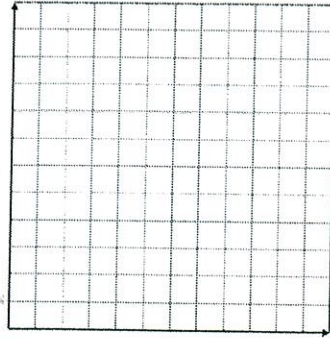
<p>2) Measures of Center and Spread (day 4 notes)</p>	<ul style="list-style-type: none"> <li>Measures of Center: mean, median, mode, Q1, Q3</li> <li>Measures of Spread: range, IQR, MAD</li> <li>When finding measures of center/spread by hand, order from least to greatest first</li> </ul>	<p>For the data sets below, find the mean, median, mode, Q1, Q3, range, and IQR.</p> <p>a) 30, 27, 24, 32, 40, 26, 37, 31, 27</p> <p>Mean =</p> <p>Median =</p> <p>Mode =</p> <p>Q1 =</p> <p>Q3 =</p> <p>Range =</p> <p>IQR =</p> <p>b) 3, 9, 5, 6, 1, 7, 1, 9</p> <p>Mean =</p> <p>Median =</p> <p>Mode =</p> <p>Q1 =</p> <p>Q3 =</p> <p>Range =</p> <p>IQR =</p>
	<ul style="list-style-type: none"> <li>The smaller the MAD, the more consistent the data.</li> </ul>	<p>c) Data set A has a MAD of 12.5 and data set B has a MAD of 8.92. Which data set is more consistent?</p> <p>d) Class A's last quiz grades had a MAD of 4.25 and Class B's last quiz grades had a MAD of 4.29. Which class was less consistent?</p>
	<ul style="list-style-type: none"> <li>Outliers are data values that are very small or very large compared to all other data values.</li> <li>No outliers = mean and range</li> <li>Outliers = median and IQR</li> </ul>	<p>Determine whether the data sets below have outliers; if they do, identify them. Then identify and find the best measure of center and spread.</p> <p>e) 50, 45, 49, 53, 51, 52, 40, 46, 48, 58, 25</p> <p>Measure of Center:</p> <p>Measure of Spread:</p> <p>f) 0, 12, 2, 6, 18, 3, 5, 11, 36, 9</p> <p>Measure of Center:</p> <p>Measure of Spread:</p>
<p>3) Box Plots (day 5)</p>	<ul style="list-style-type: none"> <li>Symmetric and Uniform = mean and range</li> <li>Skewed left/right = median and IQR</li> </ul>	<p>Describe the distributions below. Then identify and find the best measure of center and spread.</p> <p>g)</p>  <p>Measure of Center:</p> <p>Measure of Spread:</p> <p>h)</p>  <p>Measure of Center:</p> <p>Measure of Spread:</p>




	<ul style="list-style-type: none"> <li>• Unimodal = one mode</li> <li>• Bimodal = two modes</li> </ul>	<p>i) Draw a dot plot that is unimodal.</p> 	<p>j) Draw a dot plot that is bimodal.</p> 
	<ul style="list-style-type: none"> <li>• At least = that # or more</li> <li>• At most = that # or less</li> </ul>	<p>Use the dot plot below to answer the following questions.</p>  <p>m) How many people scored less than 6 goals?</p>	<p>k) How many people scored at least 3 goals?</p> <p>l) How many people scored between 2 and 5 goals?</p>
<p>4) Histograms (day 5)</p>	<ul style="list-style-type: none"> <li>• Symmetric and Uniform = mean and range</li> <li>• Skewed left/right = median and IQR</li> </ul>	<p>Describe the distributions below. Then name the best measure of center and spread.</p> <p>a) </p> <p>b) </p> <p>c) </p> <p>d) </p>	
	<ul style="list-style-type: none"> <li>• Start by sketching a histogram</li> </ul>	<p>Describe what the distribution for each scenario below would be.</p> <p>e) A hard Biology test.</p>	<p>f) Outcomes of rolling a die 1000 times</p>

- Unimodal = one mode
- Bimodal = two modes

g) Draw a histogram that is bimodal.

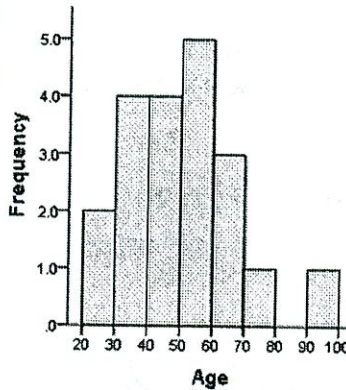


h) Draw a histogram that is unimodal.



- At least = that # or more
- At most = that # or less

Use the histogram below to answer the following questions.



i) How many people were surveyed?

j) How many people are over the age of 60?

k) How many people are at most 50?

m) What age group is the most common?

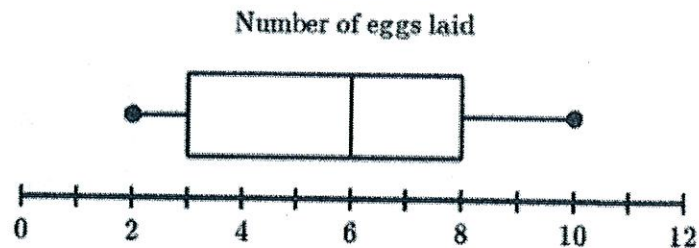
n) How many people are between 20 and 40?

5) Box Plots  
5) Box Plots  
(day 7)  
(day 7)

Five Number Summary:

- Minimum
- Q1
- Median
- Q3
- Maximum

a) Identify the five number summary of the box plot below. Be sure to include units.



- Range = max - min
- IQR = Q3 - Q1

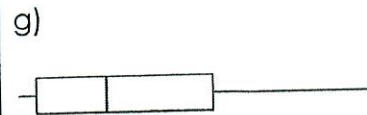
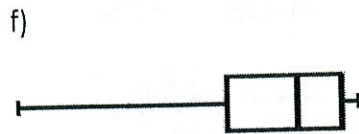
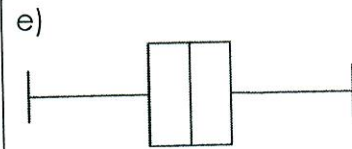

b) Find the range of the box plot above.

c) Find the IQR of the range above.



- Symmetric and Uniform = mean and range
- Skewed left/right = median and IQR

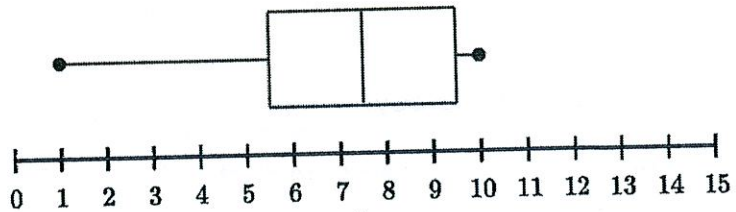
Describe the distributions below. Then identify the best measure of center and spread.



- Min = 0<sup>th</sup> percentile
- Q1 = 25<sup>th</sup> percentile
- Med = 50<sup>th</sup> percentile
- Q3 = 75<sup>th</sup> percentile
- Max = 100<sup>th</sup> percentile

Each "section" of the box plot represents 25% of the data.

60 people were surveyed on how many Harrison t-shirts they have. The results can be seen below. Use the box plot to answer the following questions.



h) What percent of people have at least 5.5 shirts?

i) What percent of people have less than 7.5 shirts?

j) How many people have more than 9.5 shirts?

k) How many people have between 5.5 and 9.5 shirts?

### Mixed Review

6) Coach Webb is trying to decide which two of his point guards he wants to start for the first round of play-offs. The data below shows the numbers of points scored by Jace and Tyler from the past six games.

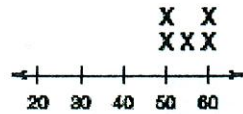
Jace: 11, 11, 6, 26, 6, 12

Tyler: 15, 12, 13, 10, 9, 13

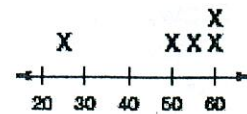
Who do you think Coach Webb should select as a starting player and why?

7) Which data set will have the greater mean absolute deviation? Why?

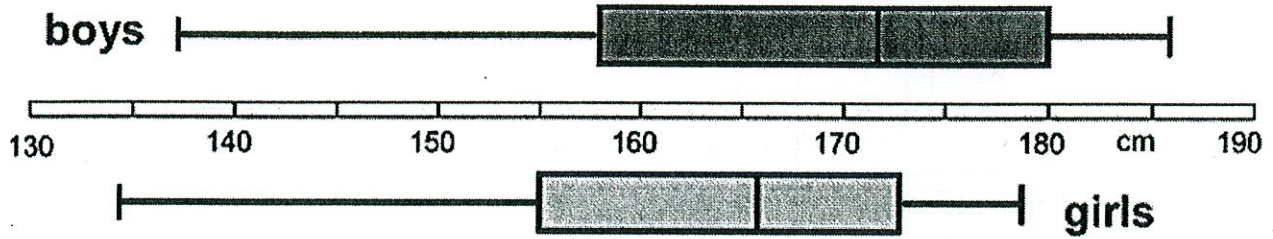
Set 1: 50, 50, 55, 60, 60



Set 2: 25, 50, 55, 60, 60



8) Determine whether the statements below are true or false based on the box plots below.



- a) The girls are taller on average. \_\_\_\_\_
- b) The shortest person is a boy. \_\_\_\_\_
- c) The tallest person is a boy. \_\_\_\_\_
- d) Both data sets are skewed to the left. \_\_\_\_\_
- e) Girls have a smaller IQR. \_\_\_\_\_